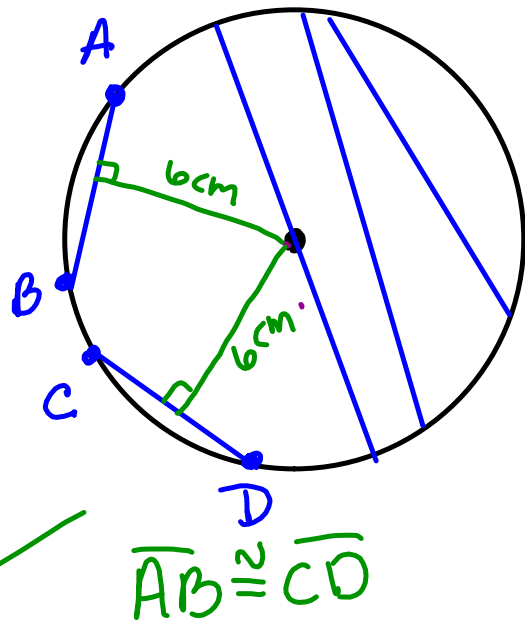


12.2. Chords and Arcs

Chord: a line segment whose endpoints are on a circle.

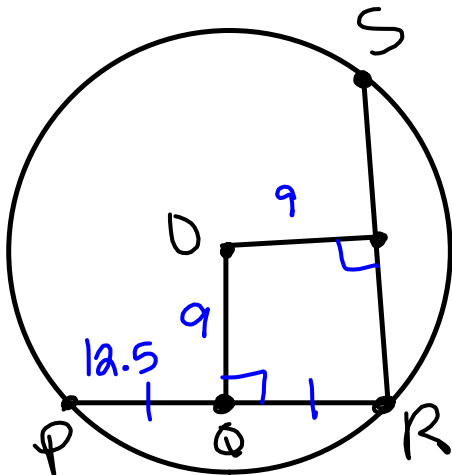
Property

*Chords equidistant from the center are congruent.



Ex1

What is the length of \overline{RS} ?



$$\overline{RS} \cong \overline{RP}$$

$$RP = 12.5 + 12.5 = 25 = RS$$

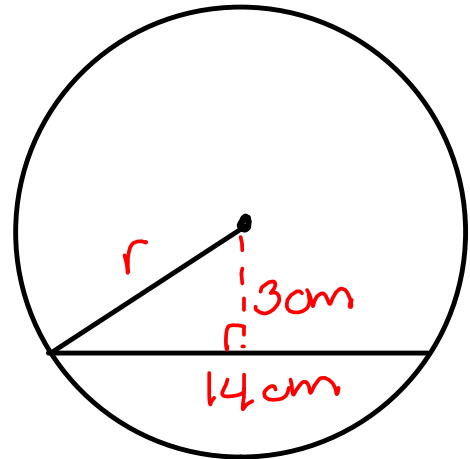
Ex 2 Find the radius.

$$3^2 + 7^2 = r^2$$

$$9 + 49 = r^2$$

$$58 = r^2$$

$$r = \sqrt{58} \text{ or } 7.6 \text{ cm}$$



Ex 3 What is the value of y?

$$11^2 + y^2 = 15^2$$

$$121 + y^2 = 225$$

$$-121 \quad -121$$

$$y^2 = 104$$

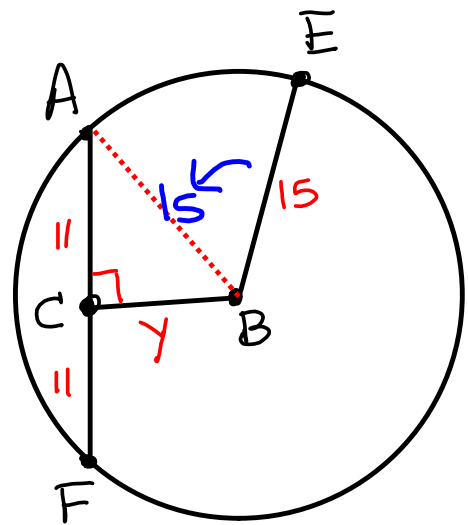
$$y = \sqrt{104}$$

$$\sqrt{2 \cdot 52}$$

$$\sqrt{2 \cdot 26}$$

$$\sqrt{2 \cdot 13}$$

$$y = \sqrt{104} = \sqrt{2} \cdot \sqrt{2} \cdot \sqrt{2} \cdot \sqrt{13} = 2\sqrt{26} \text{ or } 10.2$$



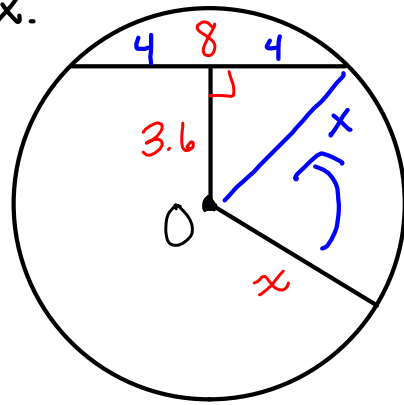
Ex 4) Find the value of x .

$$4^2 + 3.6^2 = x^2$$

$$16 + 12.96 = x^2$$

$$28.96 = x^2$$

$$5.4 = x$$



Ex 5)

The endpoints of the chord are the points where $x=3$ intersects circle $x^2+y^2=25$. What is the length of the chord? Round to the nearest tenth.

$$x=3 \quad \text{plugin}$$

$$x^2 + y^2 = 25$$

$$3^2 + y^2 = 25$$

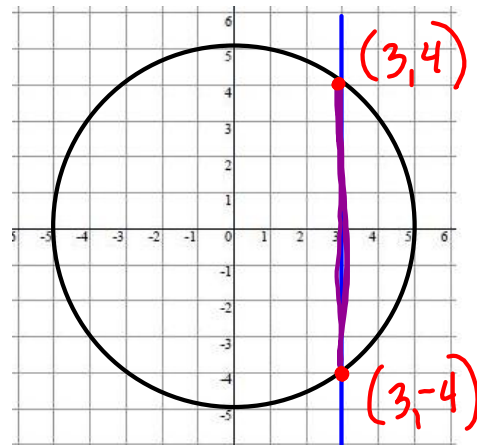
$$9 + y^2 = 25$$

$$-9 \quad -9$$

$$y^2 = 16$$

$$y = \pm 4$$

When $x=3$, $y=+4$ and -4



by looks I would
guess length = 8

Length is in fact 8